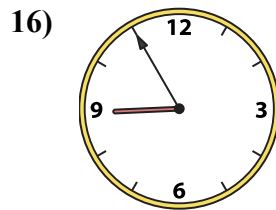
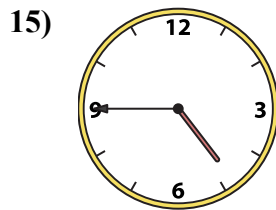
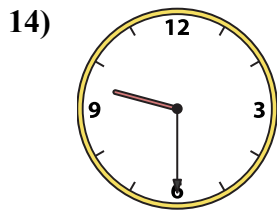
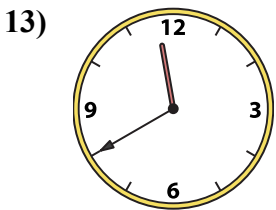
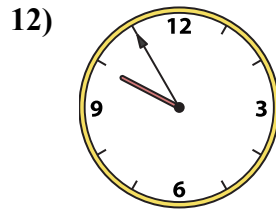
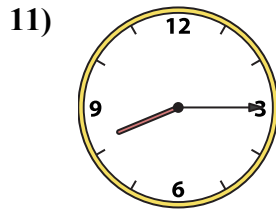
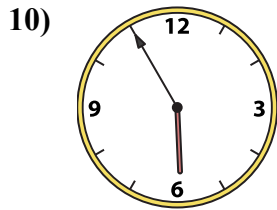
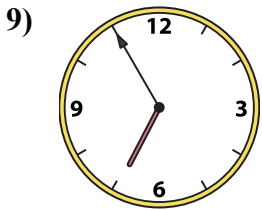
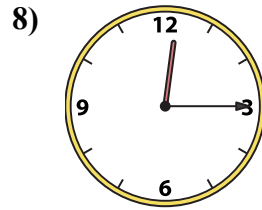
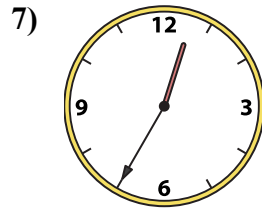
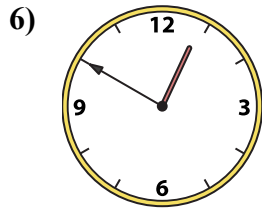
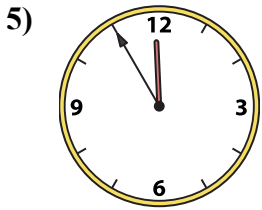
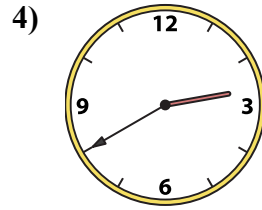
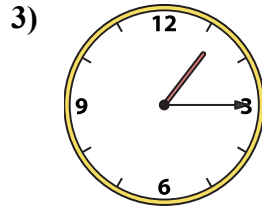
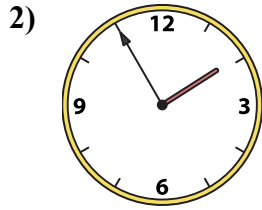
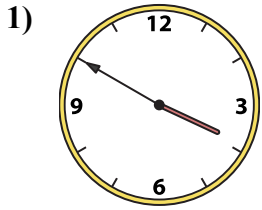




Подберите соответствующие часы к цифровым циферблатам снизу.

ОТВЕТЫ



1. _____
2. _____
3. _____
4. _____
5. _____
6. _____
7. _____
8. _____
9. _____
10. _____
11. _____
12. _____
13. _____
14. _____
15. _____
16. _____

A. 9:55

B. 5:55

C. 4:45

D. 11:40

E. 3:50

F. 1:55

G. 8:15

H. 1:15

I. 6:55

J. 8:55

K. 9:30

L. 12:50

M. 11:55

N. 12:15

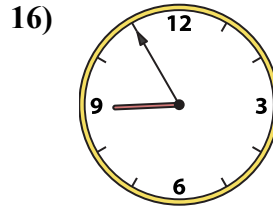
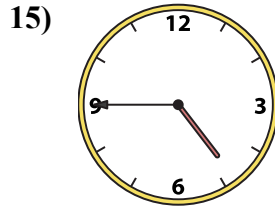
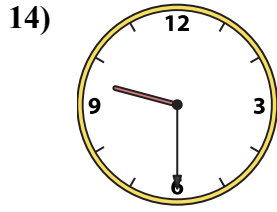
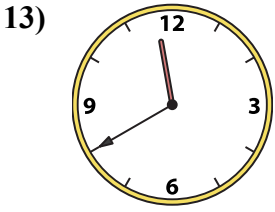
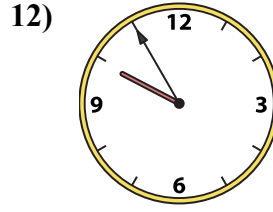
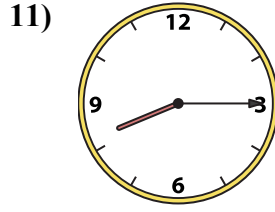
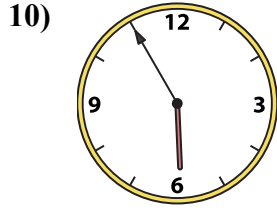
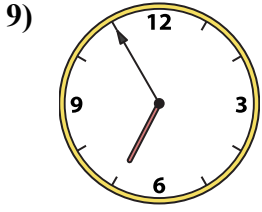
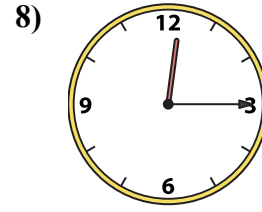
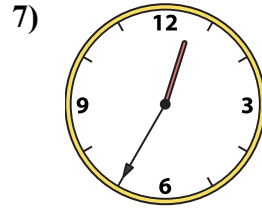
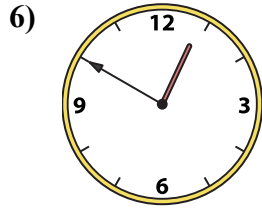
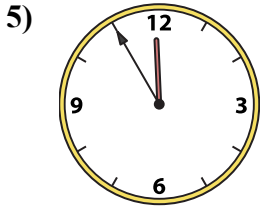
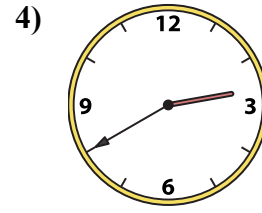
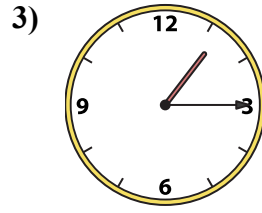
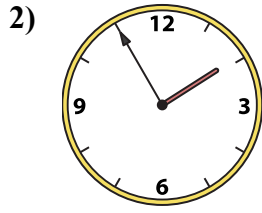
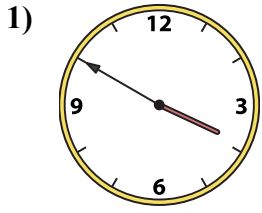
O. 12:35

P. 2:40



Подберите соответствующие часы к цифровым циферблатам снизу.

ОТВЕТЫ



A. 9:55

B. 5:55

C. 4:45

D. 11:40

E. 3:50

F. 1:55

G. 8:15

H. 1:15

I. 6:55

J. 8:55

K. 9:30

L. 12:50

M. 11:55

N. 12:15

O. 12:35

P. 2:40

- 1. E
- 2. F
- 3. H
- 4. P
- 5. M
- 6. L
- 7. O
- 8. N
- 9. I
- 10. B
- 11. G
- 12. A
- 13. D
- 14. K
- 15. C
- 16. J