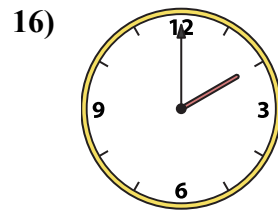
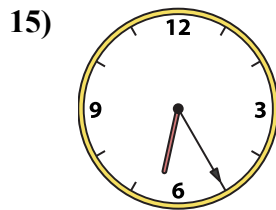
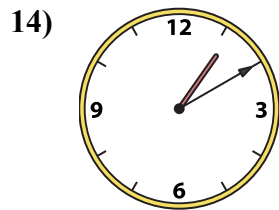
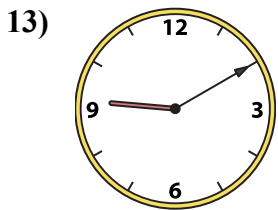
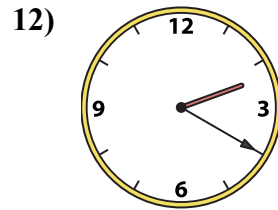
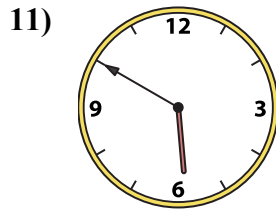
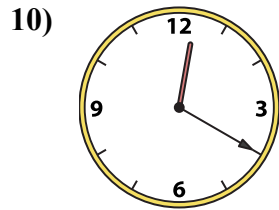
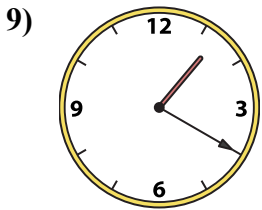
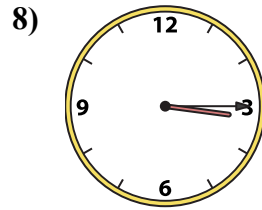
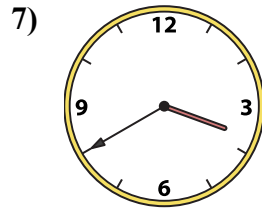
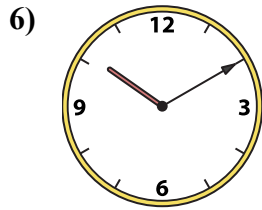
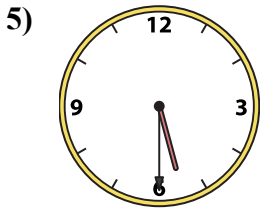
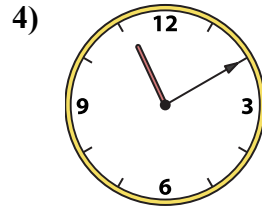
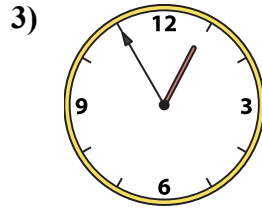
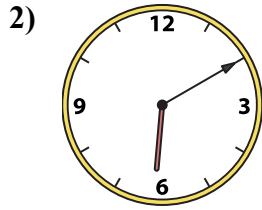
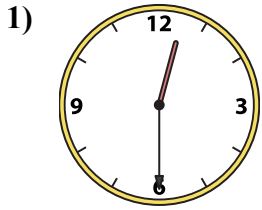




Подберите соответствующие часы к цифровым циферблатам снизу.

**ОТВЕТЫ**



1. \_\_\_\_\_
2. \_\_\_\_\_
3. \_\_\_\_\_
4. \_\_\_\_\_
5. \_\_\_\_\_
6. \_\_\_\_\_
7. \_\_\_\_\_
8. \_\_\_\_\_
9. \_\_\_\_\_
10. \_\_\_\_\_
11. \_\_\_\_\_
12. \_\_\_\_\_
13. \_\_\_\_\_
14. \_\_\_\_\_
15. \_\_\_\_\_
16. \_\_\_\_\_

A. 10:10

B. 3:40

C. 1:20

D. 12:30

E. 12:20

F. 3:15

G. 1:10

H. 6:10

I. 5:50

J. 2:00

K. 5:30

L. 6:25

M. 12:55

N. 11:10

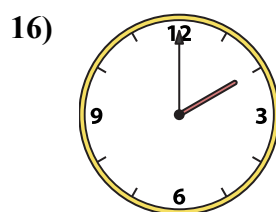
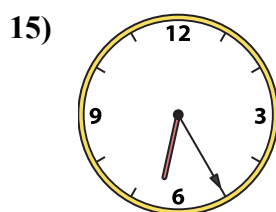
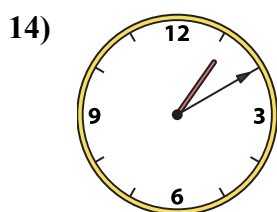
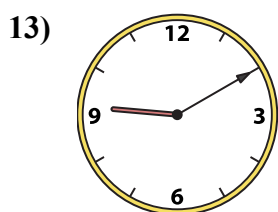
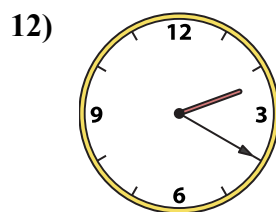
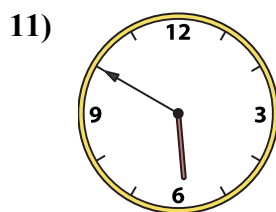
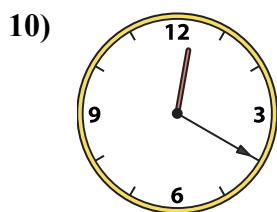
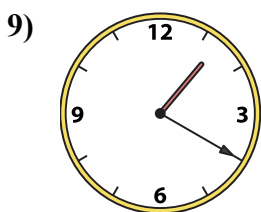
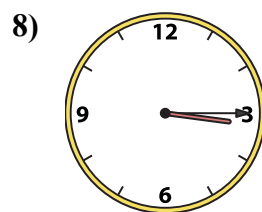
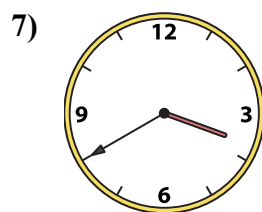
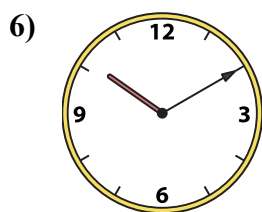
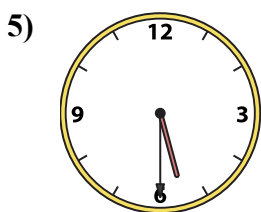
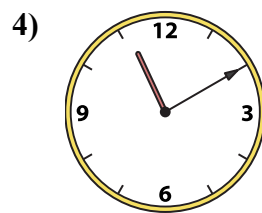
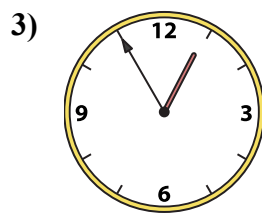
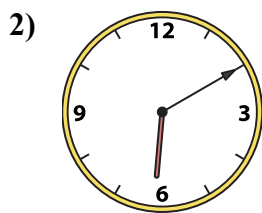
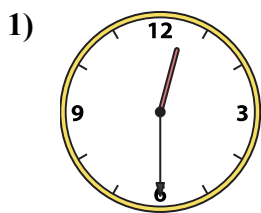
O. 9:10

P. 2:20



Подберите соответствующие часы к цифровым циферблатам снизу.

**ОТВЕТЫ**



1.    D   

2.    H   

3.    M   

4.    N   

5.    K   

6.    A   

7.    B   

8.    F   

9.    C   

10.    E   

11.    I   

12.    P   

13.    O   

14.    G   

15.    L   

16.    J   

A. 10:10

B. 3:40

C. 1:20

D. 12:30

E. 12:20

F. 3:15

G. 1:10

H. 6:10

I. 5:50

J. 2:00

K. 5:30

L. 6:25

M. 12:55

N. 11:10

O. 9:10

P. 2:20