





Подберите соответствующие часы к цифровым циферблатам снизу.

ОТВЕТЫ


1)




2)



3)




4)




5)




6)




7)



8)




9)



10)




11)



12)




13)




14)



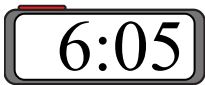
15)



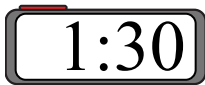
16)



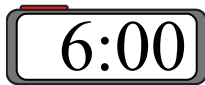
A.



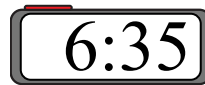
B.



C.



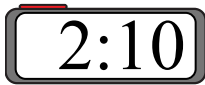
D.



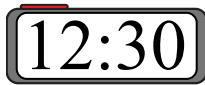
E.



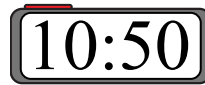
F.



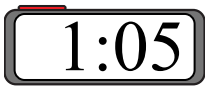
G.



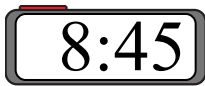
H.



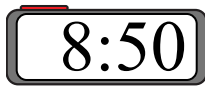
I.



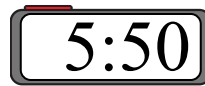
J.



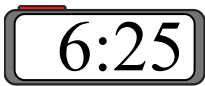
K.



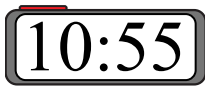
L.



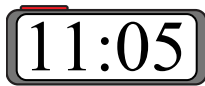
M.



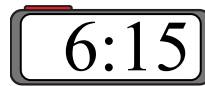
N.



O.



P.



1. _____

2. _____

3. _____

4. _____

5. _____

6. _____

7. _____

8. _____

9. _____

10. _____

11. _____

12. _____

13. _____


14. _____

15. _____

16. _____



Подберите соответствующие часы к цифровым циферблатам снизу.



ОТВЕТЫ

1. Е
2. О
3. І
4. С
5. М
6. D
7. Н
8. L
9. B
10. N
11. A
12. J
13. G
14. K
15. F
16. P

- A. **6:05** B. **1:30** C. **6:00** D. **6:35**
- E. **12:00** F. **2:10** G. **12:30** H. **10:50**
- I. **1:05** J. **8:45** K. **8:50** L. **5:50**
- M. **6:25** N. **10:55** O. **11:05** P. **6:15**