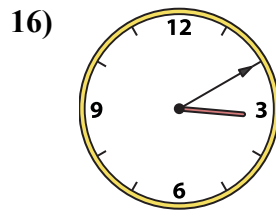
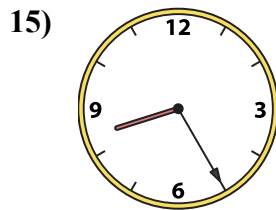
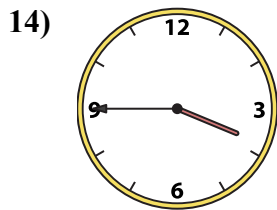
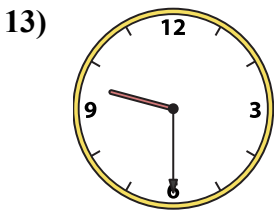
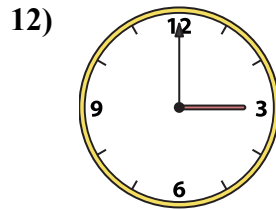
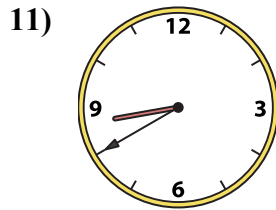
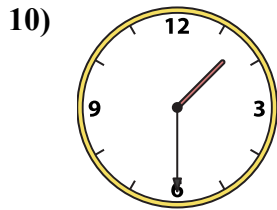
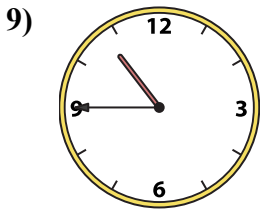
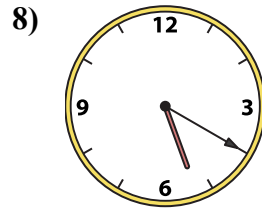
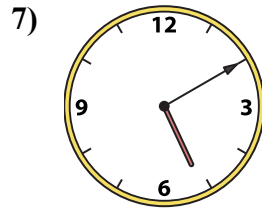
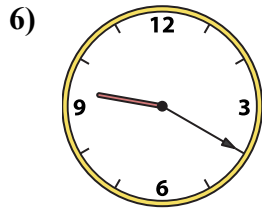
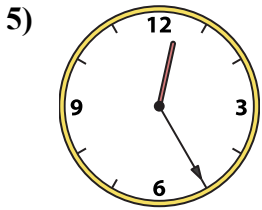
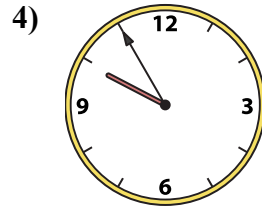
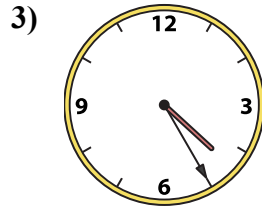
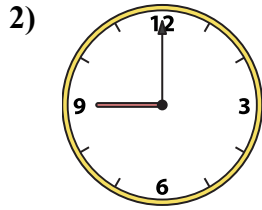
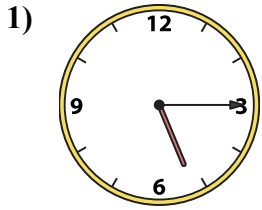




Подберите соответствующие часы к цифровым циферблатам снизу.

**ОТВЕТЫ**



1. \_\_\_\_\_
2. \_\_\_\_\_
3. \_\_\_\_\_
4. \_\_\_\_\_
5. \_\_\_\_\_
6. \_\_\_\_\_
7. \_\_\_\_\_
8. \_\_\_\_\_
9. \_\_\_\_\_
10. \_\_\_\_\_
11. \_\_\_\_\_
12. \_\_\_\_\_
13. \_\_\_\_\_
14. \_\_\_\_\_
15. \_\_\_\_\_
16. \_\_\_\_\_

A. 3:00

B. 9:30

C. 4:25

D. 9:20

E. 8:40

F. 10:45

G. 3:10

H. 5:15

I. 5:20

J. 5:10

K. 8:25

L. 12:25

M. 1:30

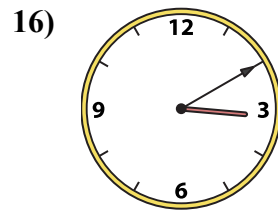
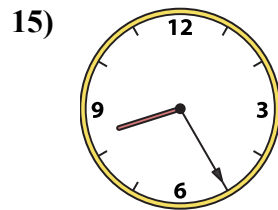
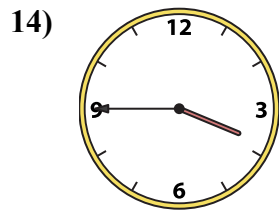
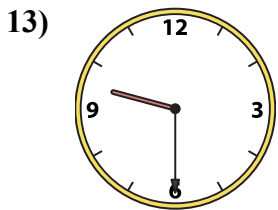
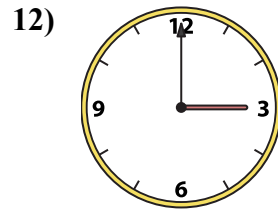
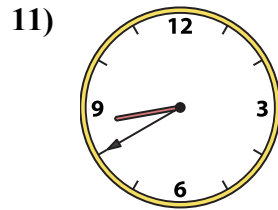
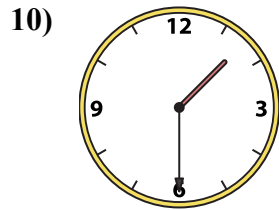
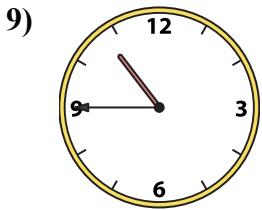
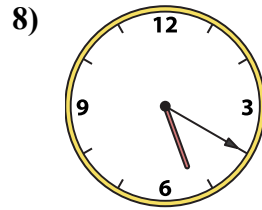
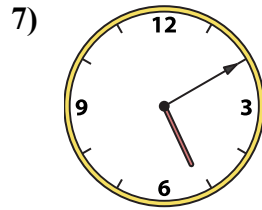
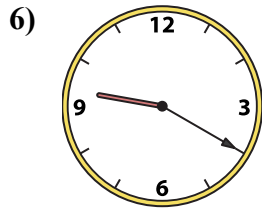
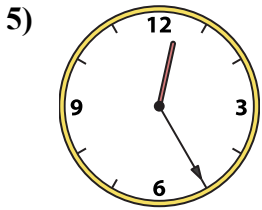
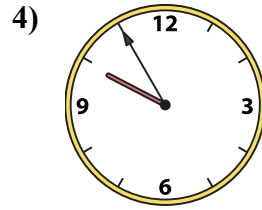
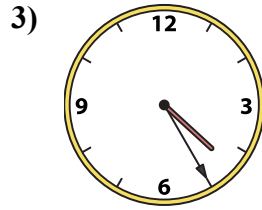
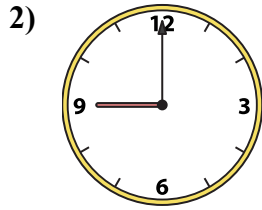
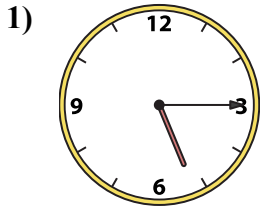
N. 3:45

O. 9:55

P. 9:00



Подберите соответствующие часы к цифровым циферблатам снизу.



A. 3:00

B. 9:30

C. 4:25

D. 9:20

E. 8:40

F. 10:45

G. 3:10

H. 5:15

I. 5:20

J. 5:10

K. 8:25

L. 12:25

M. 1:30

N. 3:45

O. 9:55

P. 9:00

**ОТВЕТЫ**

1. Н

2. Р

3. С

4. О

5. Л

6. Д

7. Ж

8. И

9. Ф

10. М

11. Е

12. А

13. В

14. Н

15. К

16. Г