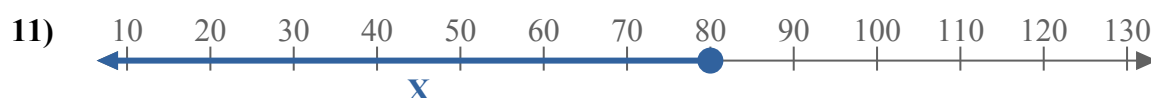
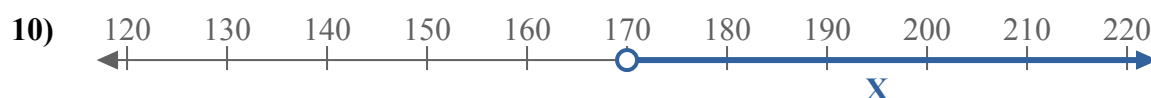
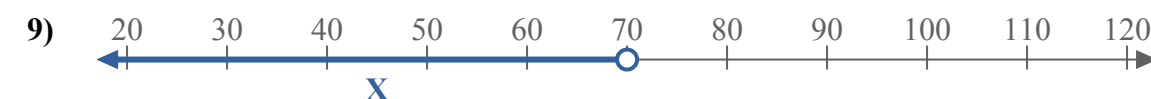
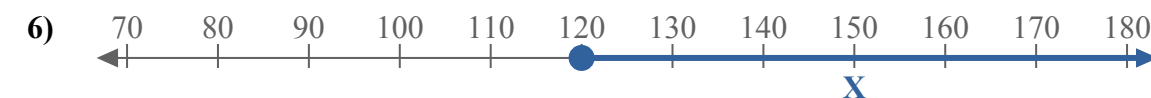
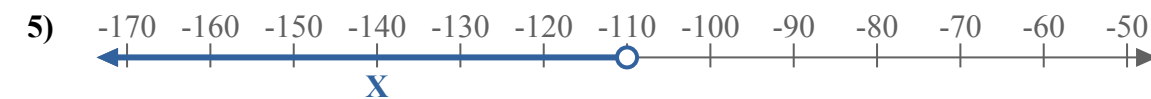
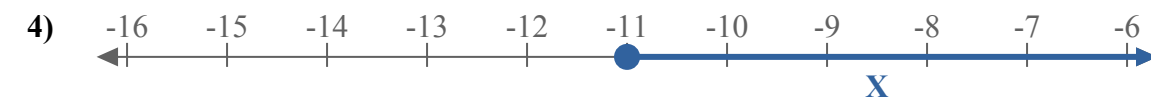
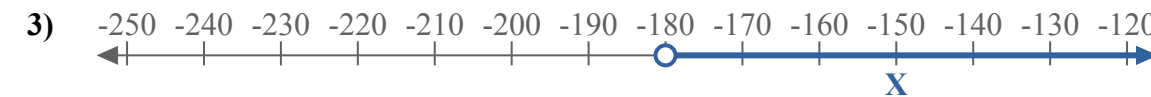
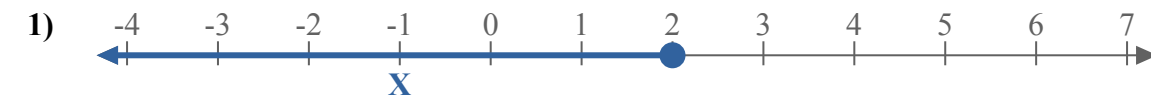
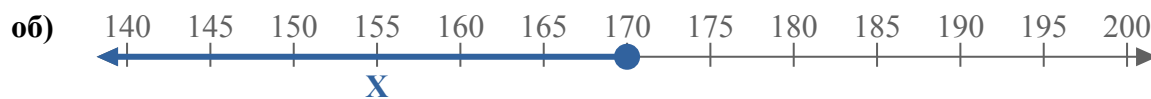




Составьте неравенство, выражающее цифровую прямую.



Отвeты

об. $X \leq 170$

1. _____

2. _____

3. _____

4. _____

5. _____

6. _____

7. _____

8. _____

9. _____

10. _____

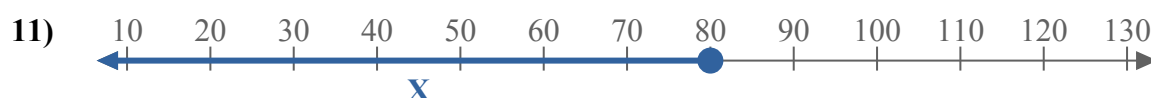
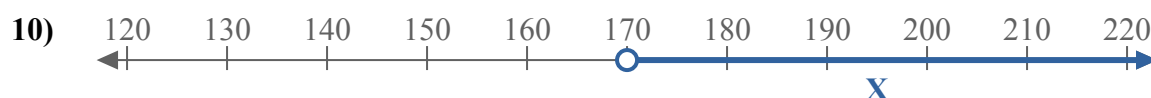
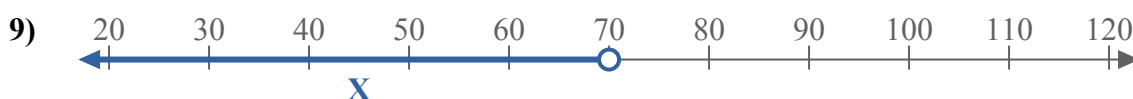
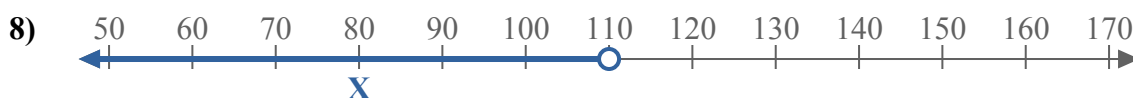
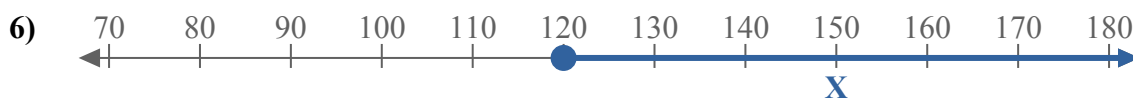
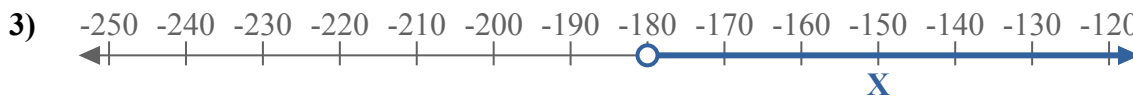
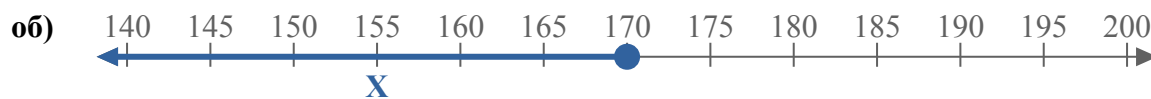
11. _____

12. _____

13. _____



Составьте неравенство, выражающее цифровую прямую.



Ответы

об. $X \leq 170$

1. $X \leq 2$

2. $X \leq -75$

3. $X > -180$

4. $X \geq -11$

5. $X < -110$

6. $X \geq 120$

7. $X < -140$

8. $X < 110$

9. $X < 70$

10. $X > 170$

11. $X \leq 80$

12. $X \geq -80$

13. $X \geq -18$